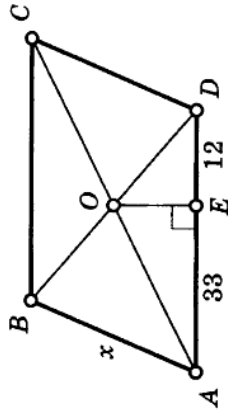
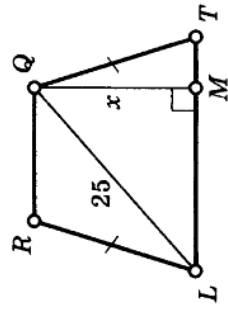


41 $ABCD$ — параллелограмм
 $S = 900$

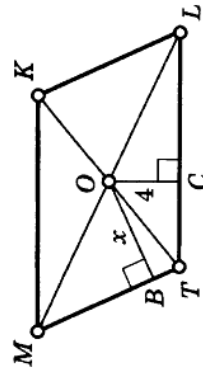


45

$LRQT$ — трапеция
 $S_{LRQT} = 300$

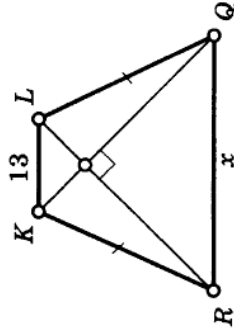


42 $MKLT$ — параллелограмм
 $S_{MKLT} = 48$, $P_{MKLT} = 40$

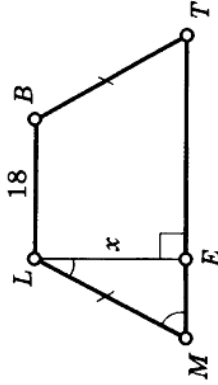


46

$RKQL$ — трапеция
 $S = 100$

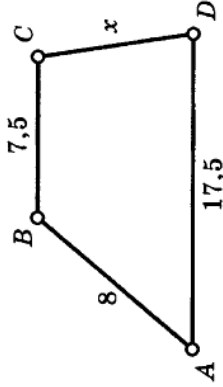


43 $MLBT$ — трапеция
 $S = 243$

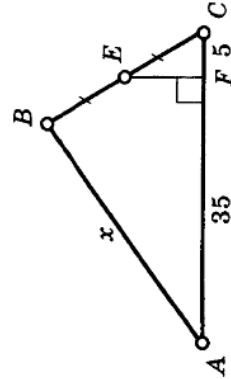


47

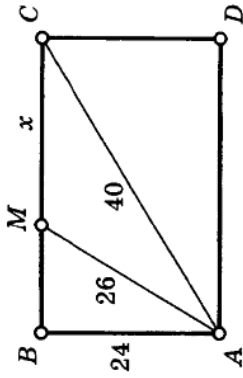
$S_{ABCD} = 60$, $AD \parallel BC$



44 $S_{\triangle ABC} = 320$

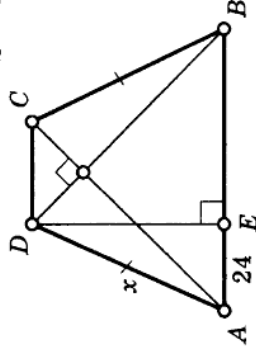


48 $ABCD$ — прямоугольник



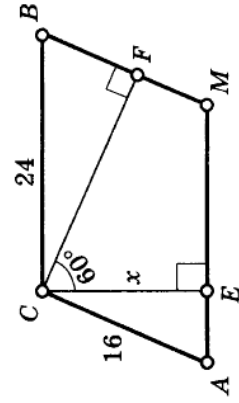
52

$ABCD$ — трапеция
 $S = 100$

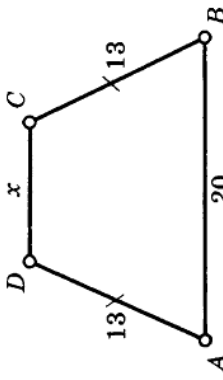


53 $ACBM$ — параллелограмм

$ABCD$ — трапеция
 $AC = 9$
 $BD = 12$
 $S = 54$



54 $S_{ABCD} = 180$



51

$RQMN$ — трапеция
 $QN = 12$
 $RM = 5$

